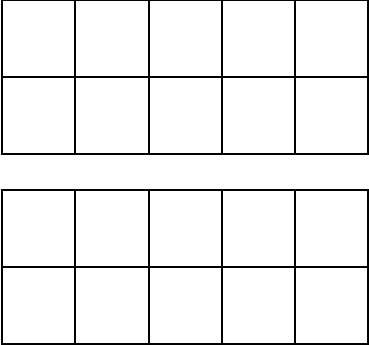
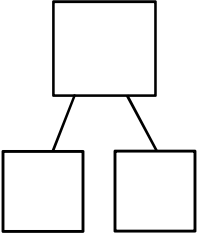
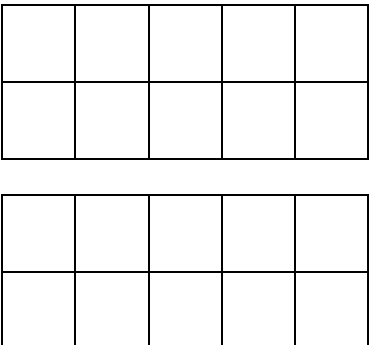
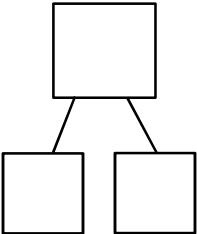

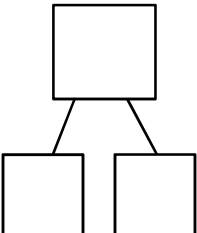
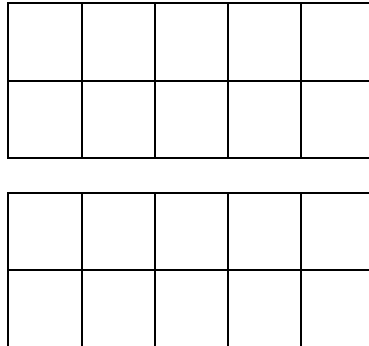
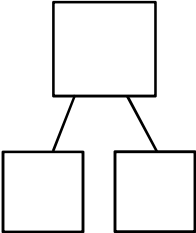


Different Ways to Make _____

Name: _____


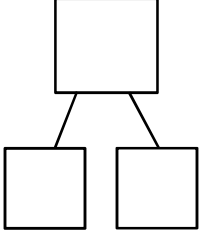
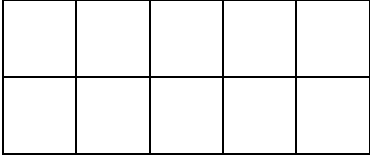
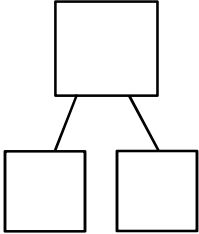
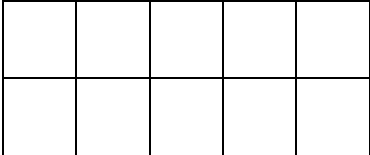
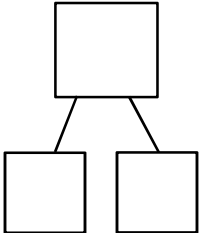
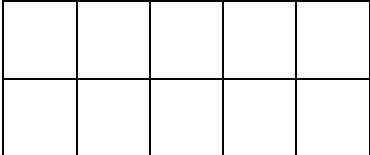
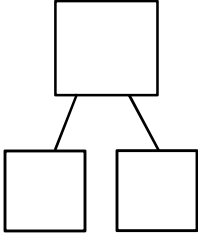
Directions: Show the different ways to make the number _____. Show the number in the ten-frame, complete the number bond, and write the number sentence.

Ten-frame	Number Bond	Number Sentence
		$\underline{\quad} + \underline{\quad} = \underline{\quad}$
		$\underline{\quad} + \underline{\quad} = \underline{\quad}$
		$\underline{\quad} + \underline{\quad} = \underline{\quad}$
		$\underline{\quad} + \underline{\quad} = \underline{\quad}$

Different Ways to Make _____

Name: _____

Directions: Show the different ways to make the number _____. Show the number in the ten-frame, complete the number bond, and write the number sentence.

Ten-frame	Number Bond	Number Sentence
		$\underline{\quad} + \underline{\quad} = \underline{\quad}$
		$\underline{\quad} + \underline{\quad} = \underline{\quad}$
		$\underline{\quad} + \underline{\quad} = \underline{\quad}$
		$\underline{\quad} + \underline{\quad} = \underline{\quad}$

Different Ways to Make _____

Name: _____

Directions: Show the different ways to make the number _____. Show the number in the ten-frame, complete the number bond, and write the number sentence.